

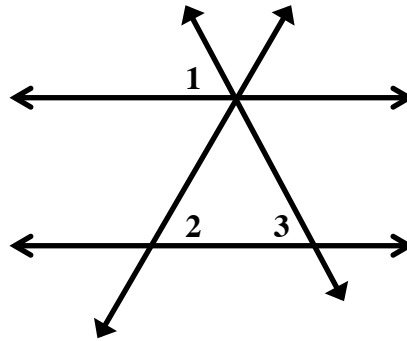
Chapter 2: Geometry

2.2 Geometry Proofs

Example #1:

Given $2=3$

Prove $1=2$

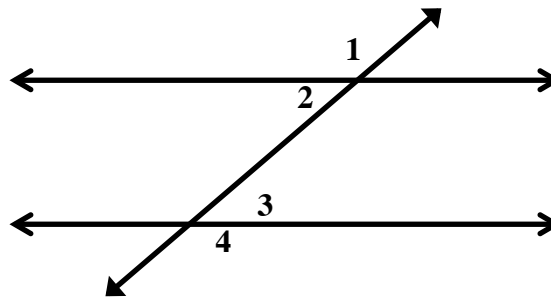


Statement	Reason

Example#2:

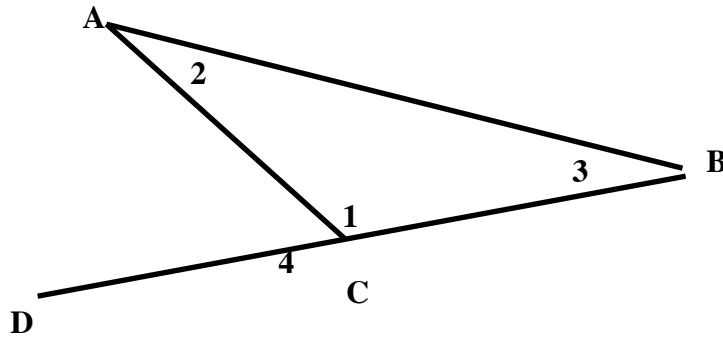
Given $2=3$

Prove $1=4$



Statement	Reason

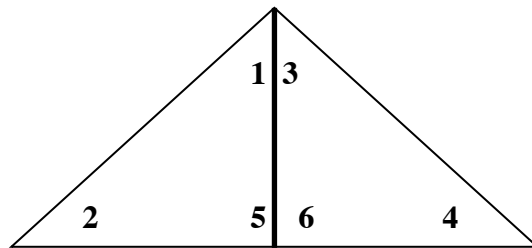
Example #3:
 Prove $4=2+3$



Statement	Reason

Example#4:

Given $BD \ AC$
Given $1=3$
Prove $2=4$



Statement	Reason